

1ST GRADE BOOTCAMP



Worksheet 1:

Date _____

There were 8 kids in the pool, and 5 more jumped in. How many kids are swimming now? Show your work.

Write the word for _____
Use the word box.

grow gr

Worksheet 2:

Date _____

Read the passage and answer the questions.

Max was so excited! He packed his backpack full of towels, toys to play in the sand, and his favorite sunglasses. His mom told him it would be about a 5 hour drive. His dad put sunscreen all over him and told him he would put more on when they got there. They packed a lunch and got in the car.

Who are the characters in the story?

Where can you infer they are going?

What clues did you use to make your inference?

Worksheet 3:

Date _____

Max went outside and saw a cylinder. Draw and label 2 things he could have seen.

Cara went to arab walking babies. Suddent and carried th Cara ran to th and she ea

Worksheet 4:

Date _____

Look at the graph and answer the questions.

Favorite Summer Activity

How many students were surveyed? ____

How many did NOT choose swimming? ____

How many chose bubbles? ____

What was the most popular activity?

How many MORE chose swimming instead of swinging? ____

swinging swimming bubbles

Worksheet 5:

Date _____

Spell the words beside each picture. Use the letter boxes to help you.

bathtub _____

shell _____

benches _____

lips _____

Write a subtraction answer is 5. Then, how?

Worksheet 6:

Draw and label an example for each digraph.


sh	ch	th	wh

BY HALEY O'CONNOR

TEACHER NOTE


This packet was designed to be used as an end of year review for 1st graders. It would also be great to send home over the summer! Some of the pages have summer theme and some are generic. Many of the pages could be used at the beginning of 2nd grade as a review as well. I would recommend stapling it together for easy access, but you could also pick and choose the pages you want to use and do them one at a time!

MY 1ST GRADE BOOTCAMP MANUAL



Soldier Name

MY 1ST GRADE BOOTCAMP MANUAL



Soldier Name

Date _____

Read each word with a beginning blend. Draw the picture beside it.

There were 8 kids in the pool, and 5 more jumped in. How many kids are swimming now? Show your work.

grow

smile

truck

drink

snail

plane

Date _____

Read each word with a beginning blend. Draw the picture beside it.

There were 8 kids in the pool, and 5 more jumped in. How many kids are swimming now? Show your work.

grow

smile

truck



drink

snail


plane


Date _____

Count each set of coins and write the value.

 _____	 _____	 _____
---	--	---




Draw an label an example of a noun and a verb.

NOUN 


VERB 


Date _____

Count each set of coins and write the value.

 _____	 _____	 _____
---	--	---

Draw an label an example of a noun and a verb.

NOUN 

VERB 

Date _____

Show 4 different combinations of 12.

Write 5 adjectives to describe
ice cream.

1. _____

2. _____

3. _____

4. _____

5. _____

Date _____

Show 4 different combinations of 12.

Write 5 adjectives to describe
ice cream.

1. _____

2. _____


3. _____

4. _____


5. _____

Date _____


Write the time under each clock.




____ : ____



____ : ____






____ : ____




____ : ____

Draw and label 3 "silent e" words.




Date _____


Write the time under each clock.




____ : ____



____ : ____






____ : ____



____ : ____

Draw and label 3 "silent e" words.



Date _____

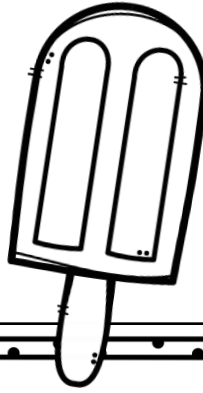
Read a new book. Draw and write about the beginning, middle, and end.

Sam had 9 popsicles. 4 were cherry and the rest were banana. How many were banana? Show your work.

B

M

E



Date _____

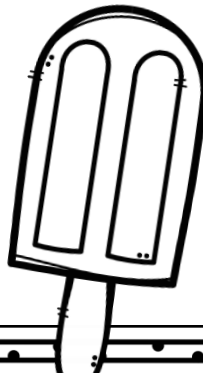
Read a new book. Draw and write about the beginning, middle, and end.

Sam had 9 popsicles. 4 were cherry and the rest were banana. How many were banana? Show your work.

B

M



E




Date _____

Read the paragraph and draw your mental image.

Max went outside and saw a cylinder. Draw and label 2 things he could have seen.





Cara went to the beach and saw a mother crab walking towards the water with her babies. Suddenly, a big wave came on shore and carried the crab family into the sea. Cara ran to the water to check on them and she saw them swim away.




Date _____

Read the paragraph and draw your mental image.

Max went outside and saw a cylinder. Draw and label 2 things he could have seen.



Cara went to the beach and saw a mother crab walking towards the water with her babies. Suddenly, a big wave came on shore and carried the crab family into the sea. Cara ran to the water to check on them and she saw them swim away.




Date _____

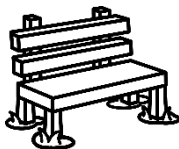
Spell the words beside each picture. Use the letter boxes to help you.



--	--	--	--



--	--	--	--	--



--	--	--	--	--	--



--	--	--	--	--


Write a subtraction story problem that's answer is 5. Then draw a picture to show how to solve it.

Date _____

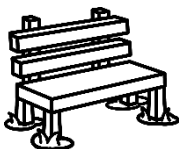
Spell the words beside each picture. Use the letter boxes to help you.



--	--	--	--



--	--	--	--	--



--	--	--	--	--	--




--	--	--	--	--

Write a subtraction story problem that's answer is 5. Then draw a picture to show how to solve it.

Date _____

Draw the 2D shape inside each box.

hexagon	rhombus
triangle	pentagon



Read the passage and highlight all the long vowel words.

Alex and Sara went to the ocean to play. They built a sand castle and set up an umbrella. They ate ice cream and played in the water. Far away, they saw three whales swim by. A huge boat passed by and made giant waves behind it.

Date _____

Draw the 2D shape inside each box.

hexagon	rhombus
triangle	pentagon




Read the passage and highlight all the long vowel words.

Alex and Sara went to the ocean to play. They built a sand castle and set up an umbrella. They ate ice cream and played in the water. Far away, they saw three whales swim by. A huge boat passed by and made giant waves behind it.

Date _____

Write about the perfect
summer day.


Liam saw 10 fish in the ocean. Some were red and some were yellow. Show 3 different combinations of fish he might have seen.



Date _____

Write about the perfect
summer day.

Liam saw 10 fish in the ocean. Some were red and some were yellow. Show 3 different combinations of fish he might have seen.



Date _____

Color 26¢



Read a nonfiction book. Write 2 questions you have about the topic.

Color 45¢



Date _____

Color 26¢



Read a nonfiction book. Write 2 questions you have about the topic.

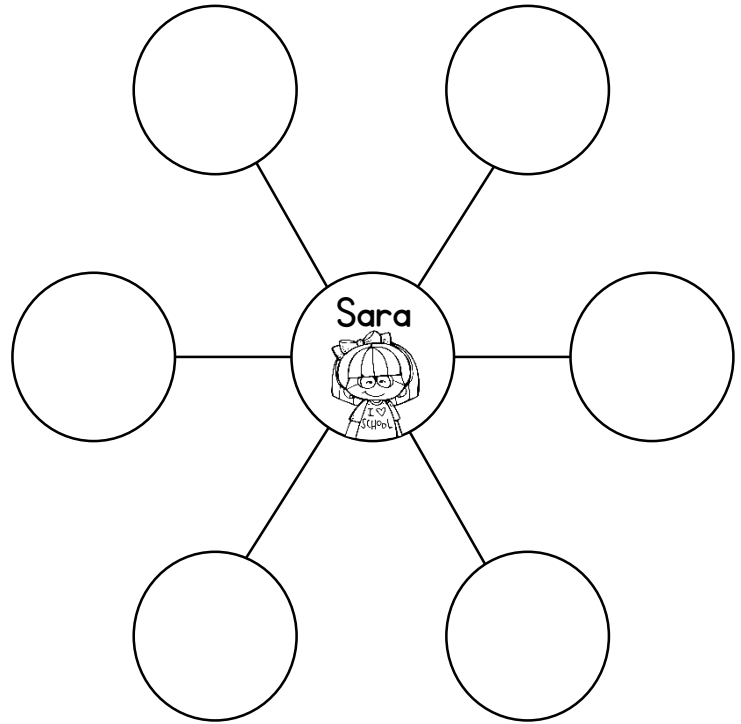
Color 45¢



Date _____

Read the passage and describe the main character.

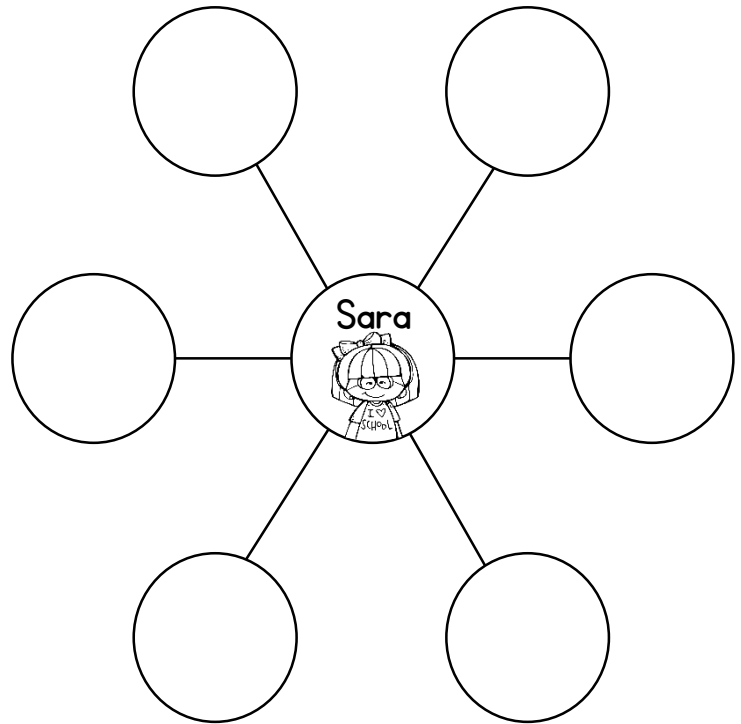
Sara was in first grade. She loved to help her teacher and her classmates. Each morning she would greet her friends with a hug and give them a compliment. If someone was upset, she would try to make them feel better. If someone was happy, she was happy with them. Everyone loved to be around Sara.



Date _____

Read the passage and describe the main character.

Sara was in first grade. She loved to help her teacher and her classmates. Each morning she would greet her friends with a hug and give them a compliment. If someone was upset, she would try to make them feel better. If someone was happy, she was happy with them. Everyone loved to be around Sara.



Date _____


Draw and label 3 sets of rhyming words.

Sam wanted to find 11 seashells. He already had 5. How many more does he need to find?

--	--

--	--

--	--



Date _____


Draw and label 3 sets of rhyming words.

Sam wanted to find 11 seashells. He already had 5. How many more does he need to find?

--	--




--	--

--	--



Date _____

Show how to divide each shape into fourths.





Write a poem about Summer.




Date _____

Show how to divide each shape into fourths.



Write a poem about Summer.



Date _____

Draw and label 2 examples of each type of noun.

person	place	thing

Ryan ate 4 popsicles on Tuesday, 7 popsicles on Wednesday, and 5 popsicles on Thursday. How many popsicles did he eat in all? Show your work.



Date _____

Draw and label 2 examples of each type of noun.

person	place	thing

Ryan ate 4 popsicles on Tuesday, 7 popsicles on Wednesday, and 5 popsicles on Thursday. How many popsicles did he eat in all? Show your work.



Date _____

Fill in the missing numbers on the chart.

91			94		96		98		100
101	102		104		106		108		110
	112			115	116	117		119	120

Draw and label an example for each digraph.

sh	ch	th	wh

Date _____

Fill in the missing numbers on the chart.

91			94		96		98		100
101	102		104		106		108		110
	112			115	116	117		119	120


Draw and label an example for each digraph.

sh	ch	th	wh

Date _____

Write 4 complete sentences about your Summer so far.


Tucker found 10 seashells on Saturday and 13 seashells on Sunday. How many more did he find on Sunday?



Date _____

Write 4 complete sentences about your Summer so far.

Tucker found 10 seashells on Saturday and 13 seashells on Sunday. How many more did he find on Sunday?



Date _____

Read a fiction book and complete the story map.

Fill in the missing numbers on the table.

ten less		ten more
	23	
	45	
	61	
	38	
	97	
	103	
	55	

characters	setting
problem	solution

Date _____

Read a fiction book and complete the story map.

Fill in the missing numbers on the table.

ten less		ten more
	23	
	45	
	61	
	38	
	97	
	103	
	55	

characters	setting
problem	solution

Date _____

Show different ways to make 10. Draw a picture and write a number sentence.

Read a fiction book. Write a letter to the main character.

Date _____

Show different ways to make 10. Draw a picture and write a number sentence.

Read a fiction book. Write a letter to the main character.

Date _____

Put the summer words in alphabetical order.

shark

fish


hot

beach

ocean

popsicle

1. _____
2. _____
3. _____
4. _____
5. _____
6. _____



Use $<$, $>$, and $=$ to compare the numbers.

45		62
13		9
56		56
28		71
84		63
105		78
39		105

Date _____

Put the summer words in alphabetical order.

shark

fish


hot

beach

ocean

popsicle

1. _____
2. _____
3. _____
4. _____
5. _____
6. _____



Use $<$, $>$, and $=$ to compare the numbers.

45		62
13		9
56		56
28		71
84		63
105		78
39		105


Date _____

Write words that follow each spelling pattern.

Haley saw 13 big fish and 4 small fish in the ocean. How many fish did she see?

ee

ea




Date _____

Write words that follow each spelling pattern.

Haley saw 13 big fish and 4 small fish in the ocean. How many fish did she see?

ee

ea

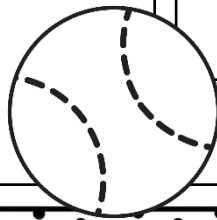


Date _____

Read the sight words. Color the ones that are spelled correctly.

Keith had some toys. He got 4 more and now he has 10 toys. How many toys did he have to start with?

with	weth
ther	there
laugh	laf
sau	saw
have	hafe
little	litel
mure	more

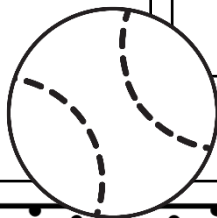


Date _____

Read the sight words. Color the ones that are spelled correctly.

Keith had some toys. He got 4 more and now he has 10 toys. How many toys did he have to start with?

with	weth
ther	there
laugh	laf
sau	saw
have	hafe
little	litel
mure	more



Date _____

Color 50¢.



Read each scenario. Predict what could happen next.

The clouds were grey and the air felt heavy. →

Mom's alarm clock didn't go off on a school morning. →

Sarah started sneezing and she had a runny nose. →

Max put a swimsuit and sunscreen on. He went in the backyard. →

Date _____

Color 50¢.



Read each scenario. Predict what could happen next.

The clouds were grey and the air felt heavy. →

Mom's alarm clock didn't go off on a school morning. →

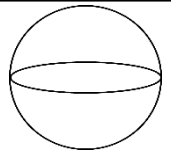
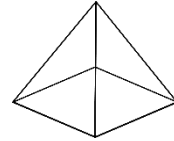
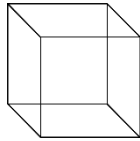
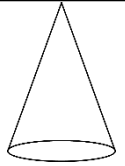
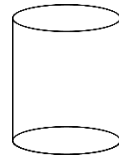

Sarah started sneezing and she had a runny nose. →

Max put a swimsuit and sunscreen on. He went in the backyard. →

Date _____

Draw and label 6 verbs.

Label each of the 3D shapes. Use the word bank to help you.



cylinder

cube

cone

sphere

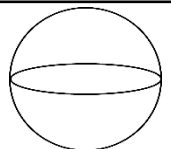
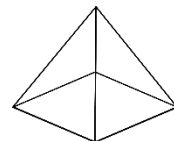
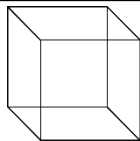
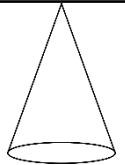
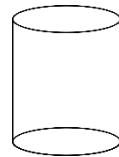

pyramid

rectangular
prism

Date _____

Draw and label 6 verbs.

Label each of the 3D shapes. Use the word bank to help you.



cylinder

cube

cone

sphere

pyramid

rectangular
prism

Date _____

Look at the graph and answer the questions.

Favorite Summer Activity

swinging



swimming



bubbles



How many students were surveyed? ____

How many did NOT choose swimming? ____

How many chose bubbles? ____

What was the most popular activity?

How many MORE chose swimming instead
of swinging? ____

Date _____

Look at the graph and answer the questions.

Favorite Summer Activity

swinging



swimming



bubbles



How many students were surveyed? ____

How many did NOT choose swimming? ____

How many chose bubbles? ____

What was the most popular activity?

How many MORE chose swimming instead
of swinging? ____

Date _____


Read the passage and answer the questions.

Max was so excited! He packed his backpack full of towels, toys to play in the sand, and his favorite sunglasses. His mom told him it would be about a 5 hour drive. His dad put sunscreen all over him and told him he would put more on when they got there. They packed a lunch and got in the car.

Who are the characters in the story?

Where can you infer they are going?

What clues did you use to make your inference?



Date _____

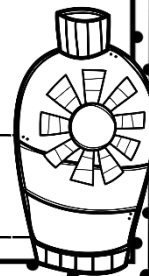
Read the passage and answer the questions.

Max was so excited! He packed his backpack full of towels, toys to play in the sand, and his favorite sunglasses. His mom told him it would be about a 5 hour drive. His dad put sunscreen all over him and told him he would put more on when they got there. They packed a lunch and got in the car.

Who are the characters in the story?

Where can you infer they are going?


What clues did you use to make your inference?



Date _____

Ryan had 12 books. 5 were fiction and the rest were nonfiction. How many were nonfiction? Show your work.


Draw a picture and write 3 complete sentences about it.



Date _____

Ryan had 12 books. 5 were fiction and the rest were nonfiction. How many were nonfiction? Show your work.

Draw a picture and write 3 complete sentences about it.



Date _____

Luna had 63 stickers. She gave 10 of them to a friend. How many stickers does she have left? Show your work.

Read each singular noun. Write the plural beside it.

boy	
ship	
fish	
class	
cup	
baby	
house	

Date _____

Luna had 63 stickers. She gave 10 of them to a friend. How many stickers does she have left? Show your work.

Read each singular noun. Write the plural beside it.

boy	
ship	
fish	
class	
cup	
baby	
house	

Date _____

There were 8 kids on the beach. How many eyes were there? Use skip counting to solve the problem and show your work.



Write the contraction for each set of words.

can not

he will

I am

she is

did not

Date _____

There were 8 kids on the beach. How many eyes were there? Use skip counting to solve the problem and show your work.



Write the contraction for each set of words.

can not

he will

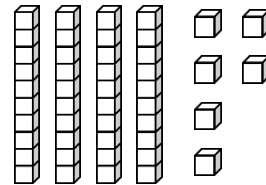
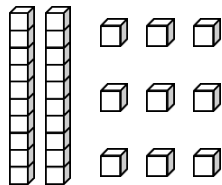
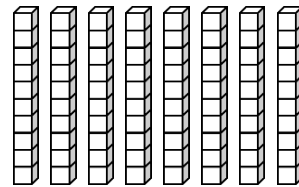
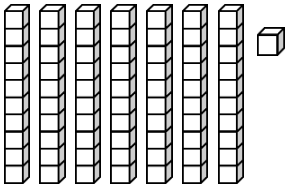
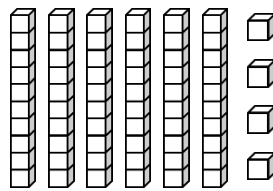
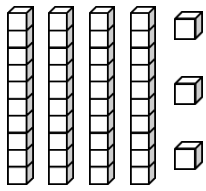
I am

she is

did not

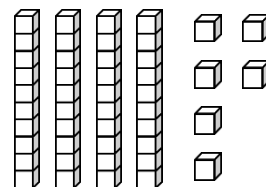
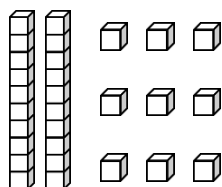
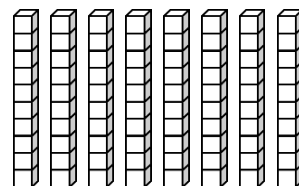
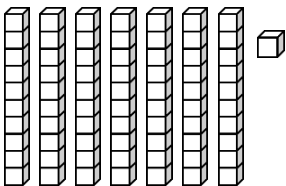
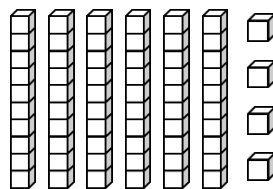
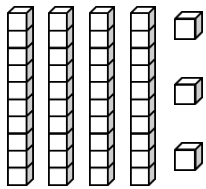
Date _____

Look at the place value blocks and write the number beside it.



Date _____

Look at the place value blocks and write the number beside it.



Date _____

Choose a nonfiction book and fill in the chart.

My Schema	My New Learning	My Wonderings

Put the numbers in order from least to greatest.

45	72	11	68
----	----	----	----

_____, _____, _____, _____

Date _____

Choose a nonfiction book and fill in the chart.

My Schema	My New Learning	My Wonderings

Put the numbers in order from least to greatest.

45	72	11	68
----	----	----	----

_____, _____, _____, _____


Date _____

Fill in the number patterns.

10	20	30		
25	30	35		
1	3	5		
11	21	31		
100	102	104		

Fix the 2 sentences and write them correctly on the lines.

keith wint 2 taRget to bye a
nuw toy? he cam Home weth a
box of legos



Date _____

Fill in the number patterns.

10	20	30		
25	30	35		
1	3	5		
11	21	31		
100	102	104		

Fix the 2 sentences and write them correctly on the lines.

keith wint 2 taRget to bye a
nuw toy? he cam Home weth a
box of legos



Date _____

Finish the number strips.

44	97	102	59
45	98	103	58
46	99	104	57

Fill in the missing vowel team for each picture.



p□□nt



m□□ll



br□□d



t□□st



b□□

Date _____

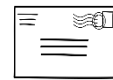
Finish the number strips.

44	97	102	59
45	98	103	58
46	99	104	57

Fill in the missing vowel team for each picture.



p□□nt



m□□ll



br□□d



t□□st



b□□


Date _____

Read a fiction book. Write about how the character changes.

Beginning

End

Caleb saw 6 sharks swim by. Then he saw 4 whales and 3 dolphins. How many sea creatures did he see swim by? Show your work?




Date _____

Read a fiction book. Write about how the character changes.

Beginning


End

Caleb saw 6 sharks swim by. Then he saw 4 whales and 3 dolphins. How many sea creatures did he see swim by? Show your work?

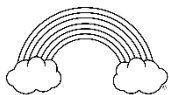


Date _____

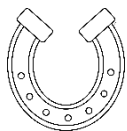
Write the two base words for each compound word.



--	--




--	--



--	--




--	--




--	--

There were 12 kids on the beach. 8 were swimming and the rest were building sandcastles. How many kids were building sandcastles?

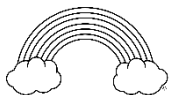


Date _____

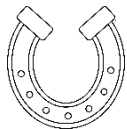
Write the two base words for each compound word.



--	--




--	--



--	--



--	--




--	--

There were 12 kids on the beach. 8 were swimming and the rest were building sandcastles. How many kids were building sandcastles?



Date _____

Read a nonfiction book. Draw and write
your favorite thing you learned.



Fill in the missing number.

$$6 + \underline{\quad} = 11$$

$$5 + \underline{\quad} = 14$$


$$\underline{\quad} + 10 = 19$$

$$3 + \underline{\quad} = 12$$

$$\underline{\quad} + 9 = 11$$

Date _____

Read a nonfiction book. Draw and write
your favorite thing you learned.



Fill in the missing number.

$$6 + \underline{\quad} = 11$$

$$5 + \underline{\quad} = 14$$

$$\underline{\quad} + 10 = 19$$

$$3 + \underline{\quad} = 12$$

$$\underline{\quad} + 9 = 11$$

WELL DONE!

I completed these pages of 1st Grade Bootcamp.

1	2	3	4	5	6	7
8	9	10	11	12	13	14
15	16	17	18	19	20	21
22	23	24	25	26	27	28
29	30	31	32	33	34	35

WELL DONE!

I completed these pages of 1st Grade Bootcamp.

1	2	3	4	5	6	7
8	9	10	11	12	13	14
15	16	17	18	19	20	21
22	23	24	25	26	27	28
29	30	31	32	33	34	35

THANK YOU!

Thank you so much for purchasing this product! I hope you absolutely loved it! Be sure to follow my store to get updates on new products!



Haley O'Connor

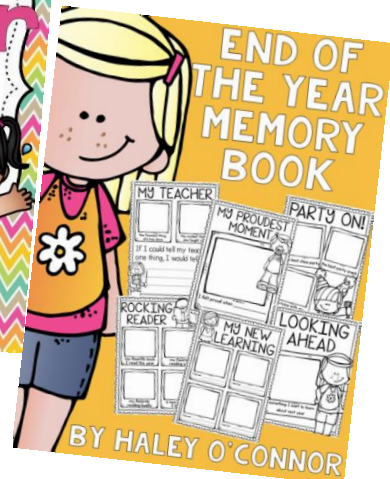

★ Follow Me (3,266)

United States - Texas - Irving

COME FOLLOW ME



Here are some other products that might be helpful to you!



CREDITS AND TOU

Thank you to these amazing clipart and font artists!



Bubbly Borders and more!



This product is for single classroom use only. Please do not redistribute.